


Characteristic curve and efficiency of a PEM fuel cell and a PEM electrolyser



Physics

Electricity & Magnetism

Simple circuits, resistors & capacitors



Difficulty level

-



Group size

-



Preparation time

-



Execution time


-

This content can also be found online at:

<http://localhost:1337/c/5f6db2de8d07970003216f75>

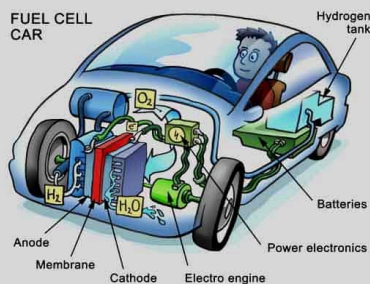
PHYWE

General information



Application

PHYWE



Fuel Cell Vehicle

The hydrogen produced from Polymer electrolyte membrane (PEM) electrolysis can be used for many applications, such as:

- Vehicle fueling
- Cooling alternators in power plants
- Power generation

Other information (1/2)

PHYWE

Prior knowledge



In principal, an electrolysis process consists of an electrolyte, electrodes, and an external power source. Electrolysis is the passing of a direct electric current through an electrolyte producing chemical reactions at the electrodes and decomposition of the materials.

Scientific principle



In a PEM electrolyser, the electrolyte consists of a protonconducting membrane and water (PEM = Proton-Exchange-Membrane). When an electric voltage is applied, hydrogen and oxygen are formed. The PEM fuel cell generates electrical energy from hydrogen and oxygen. The electrical properties of the electrolyser and the fuel cell are investigated recording a current-voltage characteristic line. The efficiency is determined measuring the quantities of the gases generated or consumed.

Other information (2/2)

PHYWE

Learning objective



Understanding the characteristics and efficiency of the PEM - electrolysis.

Tasks



1. Record the characteristic line of the PEM electrolyser.
2. Record the characteristic line of the PEM fuel cell.
3. Determine the efficiency of the PEM electrolysis unit.
4. Determine the efficiency of the PEM fuel cell.

Safety instructions

PHYWE

For this experiment the general instructions for safe experimentation in science lessons apply.

For H- and P-phrases please consult the safety data sheet of the respective chemical.

Prevent hydrogen from escaping. Completely use up all hydrogen at the end of experiments and before dismantling.

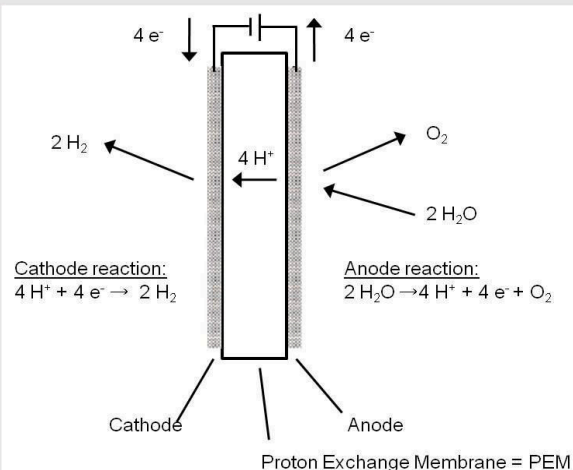
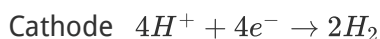
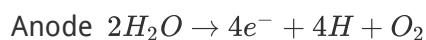
Check tubes and connections for damage before each setup.

Theory (1/11)

PHYWE

The principal part of the PEM electrolysis unit and the PEM fuel cell is a membraneelectrode unit. A layer of catalyst material has been applied to both sides of the thin protonconducting membrane (PEM = proton exchange membrane). These two layers form the anode and cathode of the electrochemical cell.

In the electrolyser the following reaction occurs:



Functional principle of a PEM electrolyser.

Theory (2/11)

PHYWE

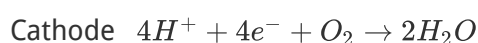
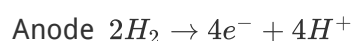
On the anode side gaseous oxygen, electrons and H^+ ions are formed when an external voltage is applied. The H^+ ions pass through the proton-conduction membrane to the cathode and form gaseous hydrogen there with the electrons flowing through the external conducting circuit. The fuel cell functions by the inverse principle.

In electrolysis electrical energy is transformed into chemical energy and stored in the form of hydrogen and oxygen; in the fuel cell chemical energy in the form of hydrogen and oxygen is directly converted, i.e. without a combustion process, into electrical energy. Hydrogen and oxygen react to form water, giving up electricity and heat.

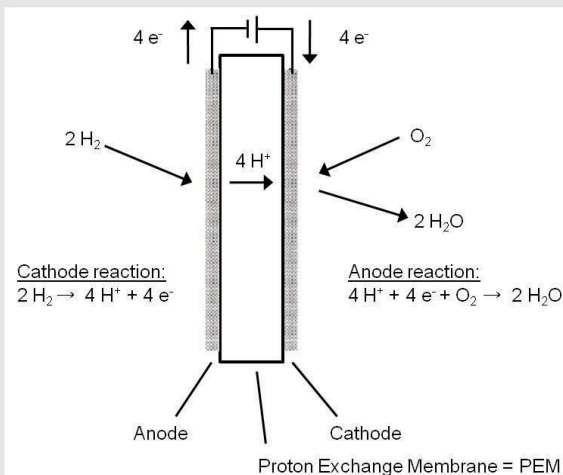
Theory (3/11)

PHYWE

In the fuel cell the following reaction occurs:



Since the gaseous hydrogen which is supplied to the anode is oxidised, it decomposes due to the catalytic action of the electrode (e.g. platinum) into protons and electrons.



Functional principle of a PEM fuel cell

Theory (4/11)

PHYWE

The H^+ ions pass through the proton-conducting membrane to the cathode side. The electrons pass through the closed outer electrical circuit to the cathode and do electrical work in this manner. The gaseous oxygen which is supplied to the cathode is reduced. In the process, water is formed in addition to the protons and electrons.

If a hydrogen and an oxygen electrode are located in an electrolyser or a fuel cell, there is a potential difference ΔD between the two electrodes. It is temperature dependent; its theoretical value can be calculated from the free enthalpy of reaction ΔG and is equal to

$$\Delta E = 1.23V \text{ at } 25^\circ\text{C}.$$

In electrolysis, the applied voltage must be at least as large as this theoretical cell voltage in order for a current to be able to flow. In the fuel cell the maximum terminal voltage can be as large as this theoretical value. In both the electrolyser and the fuel cell, additional potentials occur at the electrodes.

Theory (5/11)

PHYWE

In the electrochemical equilibrium, phase boundary potentials between the electrode and the membrane also occur at the electrodes. In the process, there is a continuous exchange of charges between the two, but the gross reaction is equal to zero.

If, in addition, a current flows through the electrolyser or the fuel cell, the electrochemical equilibrium at the electrodes is disturbed. The electrode potential takes on another value, which is dependent on the current density, due to various reactions at the electrode. This deviation from the equilibrium value is termed "electric polarization", i.e. the electrode becomes polarised.

The characteristic lines of the electrolyser and the fuel cell thus exhibit a nearly linear course only at larger values of current; in this region the movement of the ions through the membrane is decisive. The quantity of substance n liberated at an electrode can be calculated using Faraday's law.

Theory (6/11)

PHYWE

$$n = \frac{I \cdot t}{zF} \quad (1)$$

where I = current, t = time, z = number of electrons required to liberate a molecule, F = Faraday's constant, $F = 96\,485 \text{ As/mol}$.

In this experiment gases are evolved. The volume of a substance quantity n can be determined using the general gas equation.

$$V = \frac{nRT}{p} \quad (2)$$

where T = absolute temperature, p = pressure, R = general gas constant $R = 8.31 \text{ J/(mol K)}$

Theory (7/11)

PHYWE

If a current I flows in an electrolyser, the following gas volume per unit time is generated according to Equations (1) and (2):

$$\frac{V}{t} = \frac{IRT}{zFp} \quad (3)$$

In the fuel cell, this gas volume per unit time is required in order that the current I can flow. To determine the efficiency of the electrolyser and the fuel cell, the electrical W_{el} and the chemical W_{H_2} energies of the generated or required hydrogen are calculated.

$$W_{el} = U \cdot I \cdot t \quad (4)$$

$$W_{H_2} = n \cdot H \quad (5)$$

where U = voltage, I = current, t = time, n = quantity of hydrogen, H = molar caloric content (molar reaction enthalpy) of hydrogen.

Theory (8/11)

PHYWE

One differentiates between the lower caloric content H_{low} and the upper caloric content H_{up} . Molar caloric content of hydrogen:

$$H_{low} = 242.0 \text{ kJ/mol}$$

$$H_{up} = 266.1 \text{ kJ/mol}$$

The difference between the two is the molar enthalpy of vaporization (condensation enthalpy) q of water.

$$H_{up} = H_{low} + q \quad (6)$$

The efficiency of the electrolyser is greatly dependent on the respective operating condition. If it has not been used for a long time, the current intensity at 2 V can be smaller than shown in the table; after a long period of operation, sometimes much larger (e. g. greater than 4 A).

Theory (9/11)

PHYWE

Efficiency of the PEM electrolyser

The missing gas is due to diffusion losses within the cell. The efficiency of the electrolyser can be calculated using equations (4) and (5)

$$\eta = \frac{W_{H_2}}{W_{el}} = \frac{H_0 n}{UIt} \quad (7)$$

Using the general gas equation (2), the measured volumes V of hydrogen are converted to substance quantities n . Thus, one obtains the following for the efficiency:

$$\eta = \frac{H_0 p V}{RTUIt} \quad (8)$$

Theory (10/11)

PHYWE

In addition, a correction factor should be taken into consideration at this time, if the volume marks on the gasometer funnels have been checked with a volume measuring device. In our case one measurement showed the following: 250 ml in gasometer = 255 ml in volume measuring device

$$V_{corr} = 1.02 + V_{H_2}$$

Theory (11/11)

PHYWE

Efficiency of the PEM fuel cell

The missing gas is due to diffusion losses within the cell. The efficiency of the fuel cell can be calculated using equations (4) and (5)

$$\eta = \frac{W_{el}}{W_{H_2}} = \frac{UI t}{H n} \quad (9)$$

Due to the reaction occurring in the fuel cell, the upper caloric content H_{up} must be used to calculate the efficiency. In industry, it is however normal to calculate with the lower caloric content H_{low} because the heat of condensation only generates heat and no electrical energy. Using the general gas equation (2), the measured volumes V of hydrogen are converted to substance quantities n . Thus, one obtains the following for the efficiency:


$$\eta = \frac{RTUI t}{H_{up} p V} \quad (10)$$

Equipment

Position	Material	Item No.	Quantity
1	PHYWE Power supply, universal DC: 0...18 V, 0...5 A / AC: 2/4/6/8/10/12/15 V, 5 A	13504-93	1
2	PEM fuel cell kit, dismantable	06746-00	1
3	PEM electrolyser H₂/O₂ 65	06730-00	1
4	Cobra SMARTsense - Voltage, ± 30 V (Bluetooth + USB)	12901-01	1
5	Cobra SMARTsense - Current, ± 1 A (Bluetooth + USB)	12902-01	1
6	Connection box	06000-00	1
7	Resistor 10 Ohm 2%, 2W, G1	06056-10	2
8	Resistor 5 Ohm 2%, 2W, G1	06055-50	1
9	Resistor 2 Ohm 5%, 2W, G1	06055-20	1
10	Resistor 1 Ohm 2%, 2W, G1	06055-10	2
11	Short-circuit plug, black	06027-05	2
12	Gas bar	40466-00	1
13	Graduated cylinder 100 ml, PP transparent	36629-01	1
14	Rubber tubing, i.d. 4 mm	39280-00	1
15	Rubber tubing, i.d. 6 mm	39282-00	1
16	Pinchcock, width 10 mm	43631-10	4
17	Tubing adaptor, ID 3-5/6-10 mm	47517-01	2
18	Wash bottle, plastic, 500 ml	33931-00	1
19	Beaker, 250 ml, plastic (PP)	36013-01	1
20	Digital stopwatch, 24 h, 1/100 s and 1 s	24025-00	1
21	Connecting cord, 32 A, 500 mm, red	07361-01	3
22	Connecting cord, 32 A, 500 mm, blue	07361-04	2
23	Connecting cord, 32 A, 250 mm, blue	07360-04	2
24	Water, distilled 5 l	31246-81	1
25	Weather monitor, 6 lines LCD	87997-10	1
26	measureLAB, multi-user license	14580-61	1
27	Banana Plug Adapter 4mm to 2mm	06712-02	1

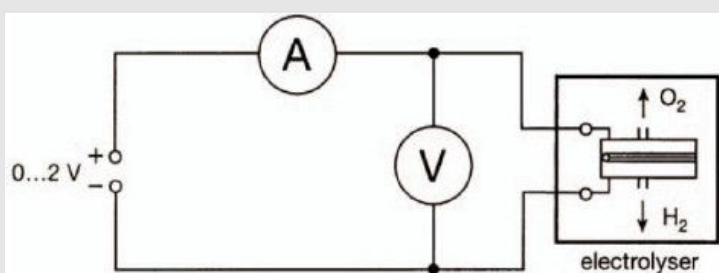
PHYWE

Setup and procedure



Setup (1/9)

PHYWE




Circuit diagram: Characteristic and efficiency of the electrolyser.

1. Characteristic line of the PEM electrolyser

- Fill both water reservoirs with water up to a level between the max. and min. marking lines.

Setup (2/9)

PHYWE

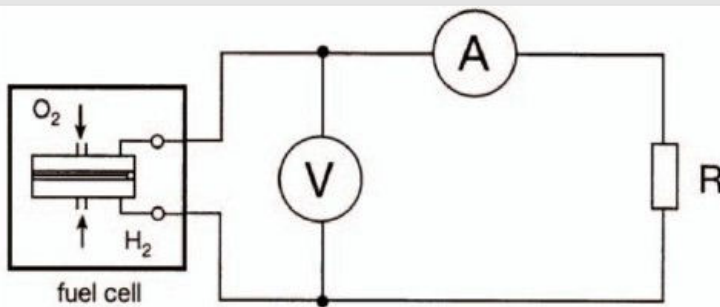


Experimental setup

- Connect the electrolyser to the direct current (DC) port of the power supply in accordance with the experimental setup and the circuit diagram.

Setup (3/9)

PHYWE



Circuit diagram


2. Characteristic line of the PEM fuel cell

To record the characteristic line, the most simple method of providing the fuel cell with gas is to connect it directly with the electrolyser. However, it is also possible to take the gas from the gas bar, as described in the measurement of efficiency section.

Preparation of the electrolyser: Connect pieces of thin rubber tubing, which are approximately 40 cm long to the upper outlet connections of the storage container on the electrolyser.

Setup (4/9)

PHYWE



Experimental setup

2. Characteristic line of the PEM fuel cell

Fill both water reservoirs up the "Gas test" line with distilled water. While doing so, hold up the tubing so that it also fills with water.

Put the rubber stoppers onto the storage containers in a manner such that no air bubbles form under them and then press them in tightly. Hold the water-filled pieces of rubber tubing into a beaker filled with distilled water. Connect the electrolyser to the power supply and set a current of max. 2 A or an operating voltage of max 2 V.

Setup (5/9)

PHYWE


When hydrogen and oxygen escape from the pieces of rubber tubing into the beaker, press the ends of the tubing briefly together; remove them from the water, and connect them to the upper inlet connections of the fuel cell.

Drops of water which could perhaps still be present in the tubes can interrupt the gas supply to the fuel cell. If this happens, the output voltage will drop. Lift the pieces of tubing briefly to allow the water to run out.

The electrical data of the fuel cell are dependent on the gas throughput and the moistness of the membrane. To create a stable condition in the fuel cell, it should be allowed to run for approximately 5 min under no-load conditions and then operated for approximately 5 min with a fixed load resistor of, e.g., 2 Ω .

Setup (6/9)

PHYWE



Experimental setup

3. Efficiency of the PEM electrolyser

Preparation of the gas bar with 2 gasometers: A gasometer consists of an Erlenmeyer flask with a cylindrical funnel and a bent glass tube mounted on it.

Connect the reducing adapters with a short piece of rubber tubing ($d_i = 6$ mm) to each of the glass tubes on the gasometer.

Setup (7/9)

PHYWE

Fill each of the gasometers via its cylindrical funnel with distilled water until the Erlenmeyer flask and the right-angled glass tube are filled and contain nearly no bubbles. Excess water then flows out via the glass tube and is collected in a beaker. The filling heights of the cylindrical funnels are calibrated. It is advisable to check the exactness of these markings by filling the entire funnel with distilled water and then allowing it to flow into a volumetric measuring device.

Connect an approximately 40-cm-long piece of thin rubber tubing ($d_i = 4$ mm) to the upper outlet connection of the storage container of the electrolyser.

Fill both water reservoirs up the "Gas test" line with distilled water. While doing so hold up the tubing so that it also fills with water.

Seal the water-filled pieces of rubber tubing with a hose clamp approximately 2 cm from their ends and attach them to the gasometers.

Setup (8/9)

PHYWE


Put the rubber stoppers onto the storage containers in a manner such that no air bubbles form under them and then press them in tightly so that no gas can escape.

Open the hose clamps.

Connect the electrolyser to the power supply according to 1. and set a current of approximately 1 A with the current adjustment knob.

Setup (9/9)

PHYWE



Experimental setup

4. Efficiency of the PEM fuel cell

To determine the efficiency of the fuel cell, both gasometers of the gas bar should be as full as possible. To achieve this connect the two gasometers with the electrolyser (hose clamps open).

Operate the electrolyser with maximum voltage (2V) or maximum current (2A).

Procedure (1/5)

PHYWE

1. Characteristic line of the PEM electrolyser

It is advisable to begin with the highest voltage $U = 2 \text{ V}$. In the process, the current may exceed the value of the maximum continuous current of $I = 2 \text{ A}$ for a short time. After approximately 1 min, the values for voltage and current become stable.

Progressively decrease the current from the power supply using the current adjustment knob. In the process, the power supply adjusts the voltage electronically so that the current has the value set. This procedure has the advantage that stable values for voltage and current are achieved more rapidly in the electrolyser.

When the current adjustment knob has reached its minimum, even smaller values can be selected with the aid of the voltage adjustment knob. Before recording a measured value, wait approximately 1 min until the current and voltage values have again become stable.

Procedure (2/5)

PHYWE

2. Characteristic line of the PEM fuel cell

Connect load resistors of different sizes to the fuel cell according to the circuit diagram. In each case measure the voltage U and the current I . First, measure the no-load voltage and then begin the measuring series with the largest resistance values.

Since the internal resistance of the ammeter can not be neglected with respect to the load resistor, always use the 10 A measuring range. For resistance values smaller than 1Ω the values for current and voltage may not always be stable when an insufficient quantity of gas is supplied.

Before making a measurement, the electric circuit should be opened for approximately 30 s, to ensure a good gas supply. Avoid short circuiting the fuel cell (max 10 s)!

Procedure (3/5)

PHYWE

3. Efficiency of the PEM electrolyser

The electrolyser generates hydrogen and oxygen in a ratio of 2:1. The volume V_{H_2} of the hydrogen generated is measured as a function of the time t . Start the time measurement when the water in the cylindrical funnel (H_2) passes the lower mark. Measure the voltage U and the current I during electrolysis.

Measure the room temperature R and the ambient pressure p_{amb} .

To conclude the experiment, switch off the electrolyser and close the tubes to the gasometers with the clamps.

A repetition of this experiment with another current (e.g. 2 A) is facilitated, when, e.g., the gasometers must again be refilled for experiments with the fuel cell.

Procedure (4/5)

PHYWE

4. Efficiency of the PEM fuel cell

If the gas production exceeds the maximum volume capacity of the gasometer (approximately 250 ml), the excess gas escapes through the funnel into the atmosphere.

As a consequence, not only the H_2 but also the O_2 gasometer can readily be completely filled using the electrolyser.

After filling the gasometer, switch off the electrolyser and tightly clamp the tubing behind the electrolyser.

- Both gasometers should contain approximately 250 ml of gas.
- Perform the experimental set-up and the circuit in 2)

Procedure (5/5)

PHYWE

- Tightly seal the lower outlet connections with short pieces of rubber tubing ($d_i = 4 \text{ mm}$) and hose clamps.
- Connect each of the two upper inlet connections of the fuel cell to a gasometer.
- Loosen the clamps on the connecting hoses between the gasometer and the fuel cell.
- Connect a load resistor of 1Ω to the fuel cell in accordance with the circuit in 2)

Evaluation (1/10)

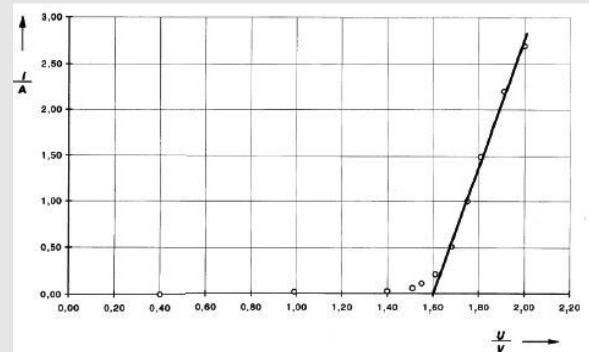
PHYWE

1) Current-voltage characteristic of the PEM electrolyser

The measured values are plotted in the shown figure.

From the linear segment of the characteristic line, the decomposition voltage U_z is determined as the intersection of the extended straight line with the U axis:

$$U_z = 1.60 \text{ V}$$



Current-voltage characteristic line of a PEM electrolyser

Evaluation (2/10)

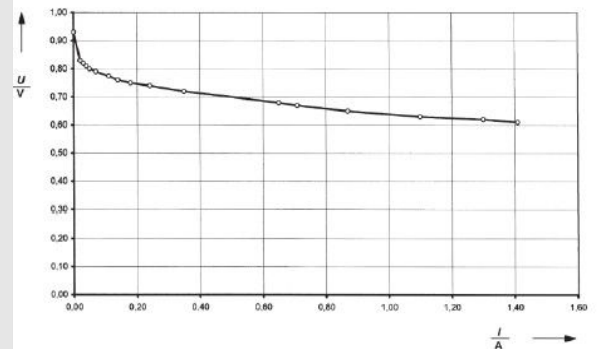
PHYWE

2) Characteristic line of the PEM fuel cell

The efficiency of the fuel cell is a function of the gas pressures, the gas throughput, the moistness of the membrane and the temperature.

The no load voltage is $U_0 = 0.93 \text{ V}$.

For greater values of current, the characteristic line exhibits a nearly linear course. If the characteristic line deviates from a linear course in this region, it is possible that the supplies of hydrogen and oxygen to the fuel cell are inadequate.



Current-voltage characteristic line of a PEM fuel cell

Evaluation (3/10)

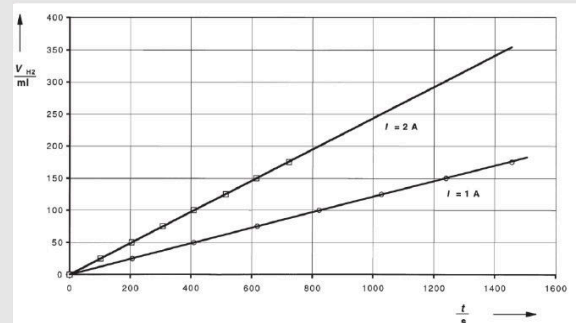
PHYWE

3) Efficiency of the PEM electrolyser

From the slope of the straight lines ($I = 1 \text{ A}$ and $I = 2 \text{ A}$), the generated volumes pro unit time V_{H_2}/t (measured) can be read off. They are compared with the theoretical values according to equation (3) and from this the gas yield, i.e. the so-called current efficiency, is calculated.

Other conditions:

$$U = 1.71 \text{ V}; p_{amb} = 984 \text{ hPa}; T_R = 21^\circ \text{C}$$



Volume of the hydrogen generated by the PEM electrolyser as a function of time at different current I

Evaluation (4/10)

PHYWE

The pressure generated by the column of water in the gasometer must be added to the measured ambient pressure p_{amb} . This has an average value of approximately 20 hPa. On the other hand the produced hydrogen is saturated with steam, whose partial pressure is 23 hPa. As these two effects compensate each other, no correction of the pressure has to be performed.

Other conditions:

$$p_{amb} = 984 \text{ hPa} ; T_R = 294 \text{ K}$$

Experimental conditions	V_{H_2} / t measured	V_{H_2} / t theoretical	Gas yield
$I = 1.02 \text{ A}$ $U = 1.71 \text{ V}$	0.121 ml/s	0.131 ml/s	92%
$I = 2.02 \text{ A}$ $U = 1.71 \text{ V}$	0.243 ml/s	0.243 ml/s	94%

Evaluation (5/10)

PHYWE

The efficiency of the electrolyser is somewhat larger at 1.71 V / 1.02 A than for 1.83 V / 2.01 A. The gas yield is the same in both cases.

Other conditions:

$$p_{amb} = 984 \text{ hPa} ; T_R = 294 \text{ K}$$

Experimental conditions	Efficiency
$I = 1.02 \text{ A}$ $U = 1.71 \text{ V}$	82%
$I = 2.02 \text{ A}$ $U = 1.71 \text{ V}$	78%

Evaluation (6/10)

PHYWE

4. Efficiency of the PEM fuel cell

Sample results with load resistance 1Ω

$$p = p_{amb} = 984 \text{ hPa} ; T = 22^\circ \text{C}$$

Mean values:

$$t = 287 \text{ s}$$

$$U = 0.66 \text{ V};$$

$$I = 0.65 \text{ V}$$

Mark	V_{h_2}/ml	$t/\text{min} : \text{s}$	U/V	I/A
225	25	0:00	0.68	0.67
200		4:42	0.66	0.65
175	25	0:00	0.67	0.66
150		4:47	0.66	0.64
125	25	0:00	0.67	0.65
100		4:57	0.65	0.64

Evaluation (7/10)

PHYWE

Sample results with load resistance 1Ω

$$p = p_{amb} = 984 \text{ hPa} ; T = 23^\circ \text{C}$$

Mean values:

$$t = 540 \text{ s};$$

$$U = 0.75 \text{ V};$$

$$I = 0.35 \text{ V}$$

Mark	V_{h_2}/ml	$t/\text{min} : \text{s}$	U/V	I/A
225	25	0:00	0.75	0.35
200		9:05	0.75	0.35
175	25	0:00	0.75	0.35
150		9:07	0.73	0.34
125	25	0:00	0.75	0.35
100		8:57	0.75	0.35

Evaluation (8/10)

PHYWE

The theoretically required gas volume, determined according to equation (3), is compared with the measured one, and from this the gas utilisation is calculated.

Experimental conditions	V_{H_2} / t measured	V_{H_2} / t theoretical	Gas yield
$I = 1.02 A$ $U = 1.71 V$ $p_{amb} = 998 hPa$ $T_R = 295 K$	0.0871 ml/s	0.0832 ml/s	96%
$I = 2.02 A$ $U = 1.71 V$ $p_{amb} = 998 hPa$ $T_R = 296 K$	0.0463 ml/s	0.0447 ml/s	97%

Evaluation (9/10)

PHYWE

The efficiency of the electrolyser is somewhat larger at 0.75 V / 0.35 A than at 0.66 V / 0.65 A. The gas yield is the same in both cases.

Experimental conditions	Efficiency (using H_{up})	Efficiency (using H_{low})
$I = 1.02 A$ $U = 1.71 V$ $p_{amb} = 998 hPa$ $T_R = 295 K$	82%	49%
$I = 2.01 A$ $U = 1.83 V$ $p_{amb} = 998 hPa$ $T_R = 296 K$	78%	57%

Evaluation (10/10)

PHYWE

In PEM water electrolyser, generation of hydrogen occurs at

- ☐ the anode
- ☐ the cathode
- ☐ both the cathode and anode

☒ Check

The residual product discharged by the hydrogen-oxygen cell is

- ☐ Water
- ☐ Alcohol
- ☐ Hydrogen peroxide

☒ Check

Slide

Score/Total

Slide 42: Multiple tasks

0/2

Total Score  0/2 Show solutions Retry